

Geography
Higher level and standard level
Paper 1

Tuesday 6 November 2018 (afternoon)

Candidate session number

1 hour 30 minutes

--	--	--	--	--	--	--	--	--	--

Instructions to candidates

- Do not open this examination paper until instructed to do so.
- Section A: answer all questions.
- Section B: answer one question.
- Answers must be written within the answer boxes provided.
- Use examples, maps and/or diagrams where relevant.
- The maximum mark for this examination paper is **[60 marks]**.



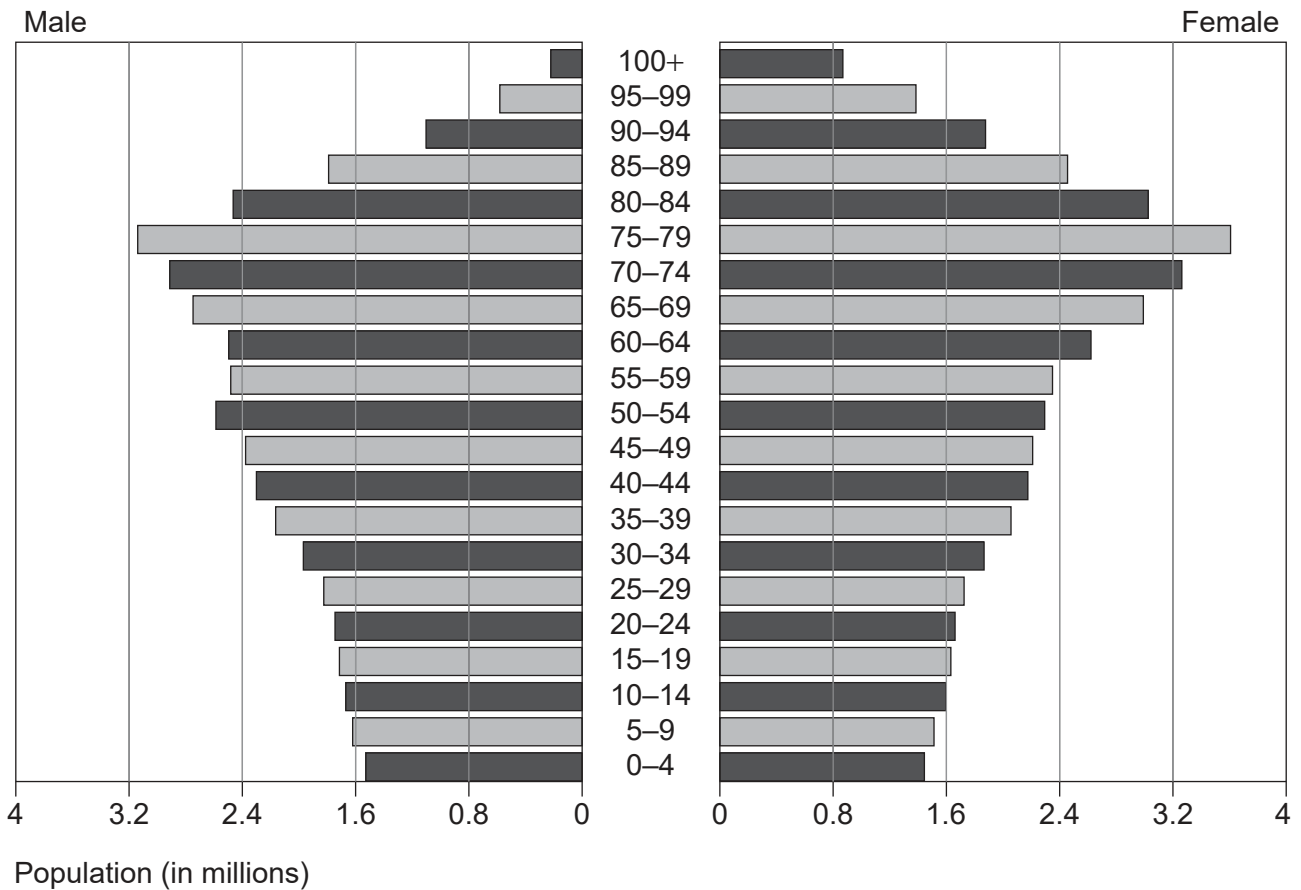
Core theme: patterns and change

Section A

Answer **all** questions. Answers must be written within the answer boxes provided.

1. Populations in transition

The graph shows a projected population pyramid for Japan in 2050.



[Source: adapted from US Census Bureau]

(a) Describe **three** characteristics of this projected population structure.

[3]

Characteristic 1:

Characteristic 2:

Characteristic 3:

(This question continues on the following page)



16EP02

(Question 1 continued)

(b) (i) Estimate the difference, in millions, between the projected numbers of males and females in the 75–79 age group.

[1]

.....
.....

(ii) Suggest **two** reasons for the difference estimated in (b)(i).

[2+2]

Reason 1:
.....
.....
.....
Reason 2:
.....
.....
.....

(c) Suggest **two** reasons why governments need population projections.

[2+2]

Reason 1:
.....
.....
Reason 2:
.....
.....
.....

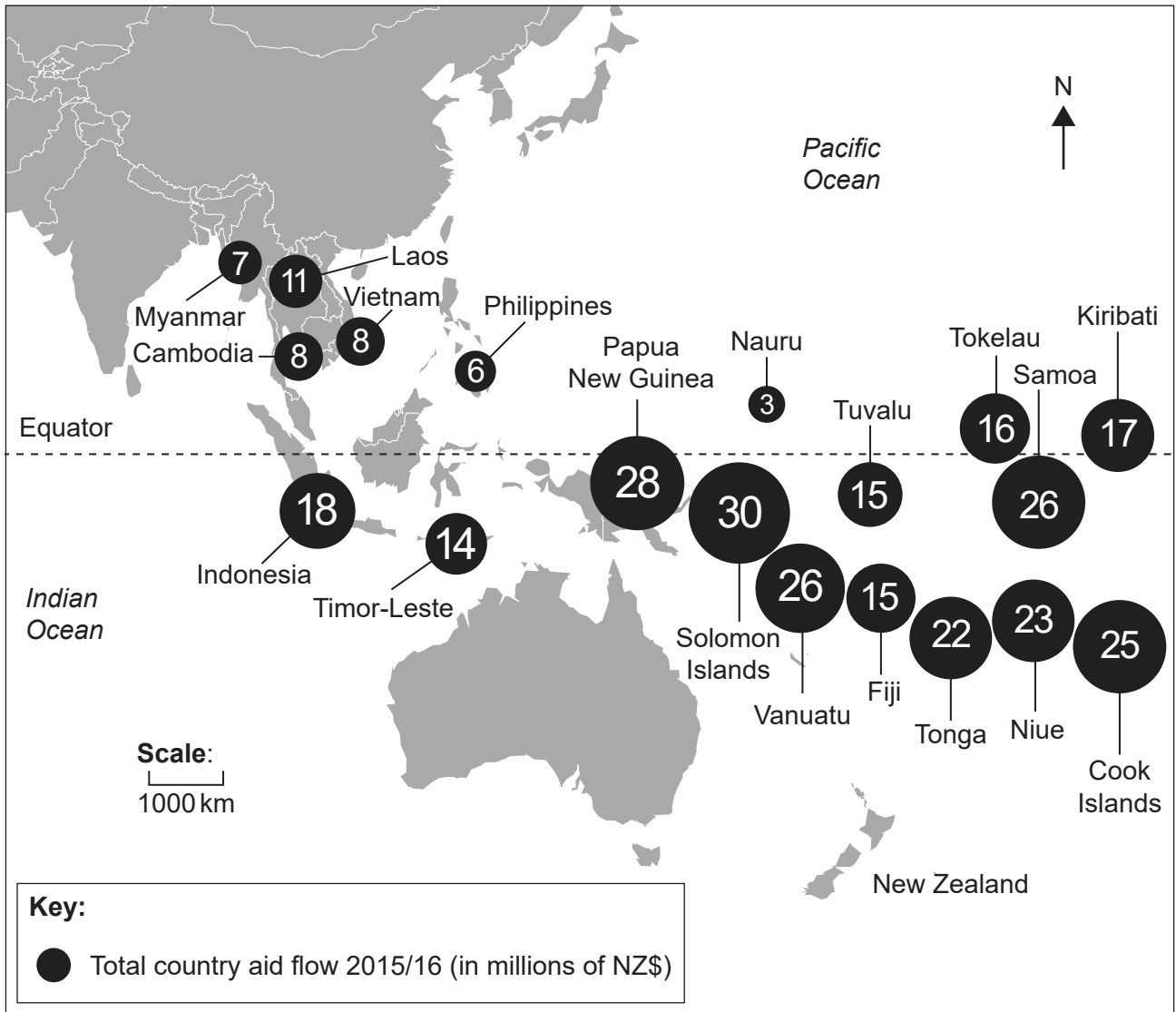


16EP03

Turn over

2. Disparities in wealth and development

The map shows where the financial aid from New Zealand went in 2016.



[Source: adapted from www.mfat.govt.nz. Licensed under CC BY 4.0 (<https://creativecommons.org/licenses/by/4.0/>)]

(a) Describe the pattern of financial aid flows from New Zealand.

[3]

.....

.....

.....

.....

.....

.....

(This question continues on the following page)



16EP04

(Question 2 continued)

(b) Explain **three** limitations of international aid. [2+2+2]

Limitation 1:
Limitation 2:
Limitation 3:

(c) Suggest **one** advantage **and one** disadvantage of using global goals (such as the Millennium Development Goals) to help countries develop. [2+2]

Advantage:
Disadvantage:

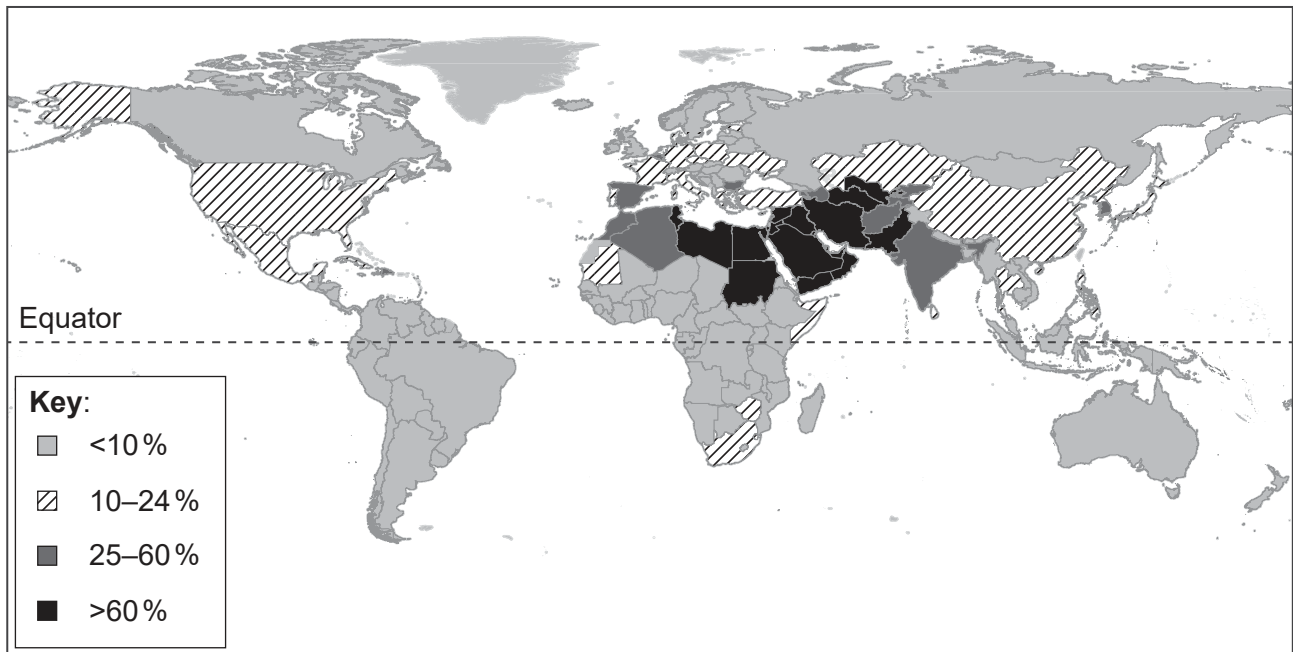


16EP05

Turn over

3. Patterns in environmental quality and sustainability

The map shows the proportion of renewable water resources that each country uses each year.



[Source: Food and Agriculture Organization of the United Nations, 2015, FAO- AQUA STAT, Proportion of renewable water resources withdrawn: MDG Water Indicator, http://www.fao.org/nr/water/aquastat/maps/MDG_eng.pdf. Reproduced with permission.]

(a) Outline what is meant by the term “environmental sustainability”.

[2]

.....

.....

.....

.....

(b) Describe the distribution of countries that are using more than 60% of their renewable water resources.

[2]

.....

.....

.....

.....

(This question continues on the following page)



16EP06

(Question 3 continued)

(c) Explain **one** reason why economic water scarcity is relatively common in Sub-Saharan Africa.

[2]

.....

.....

.....

.....

(d) Explain **two** ways in which access to safe drinking water can be improved.

[2+2]

Way 1:

.....

.....

.....

Way 2:

.....

.....

.....

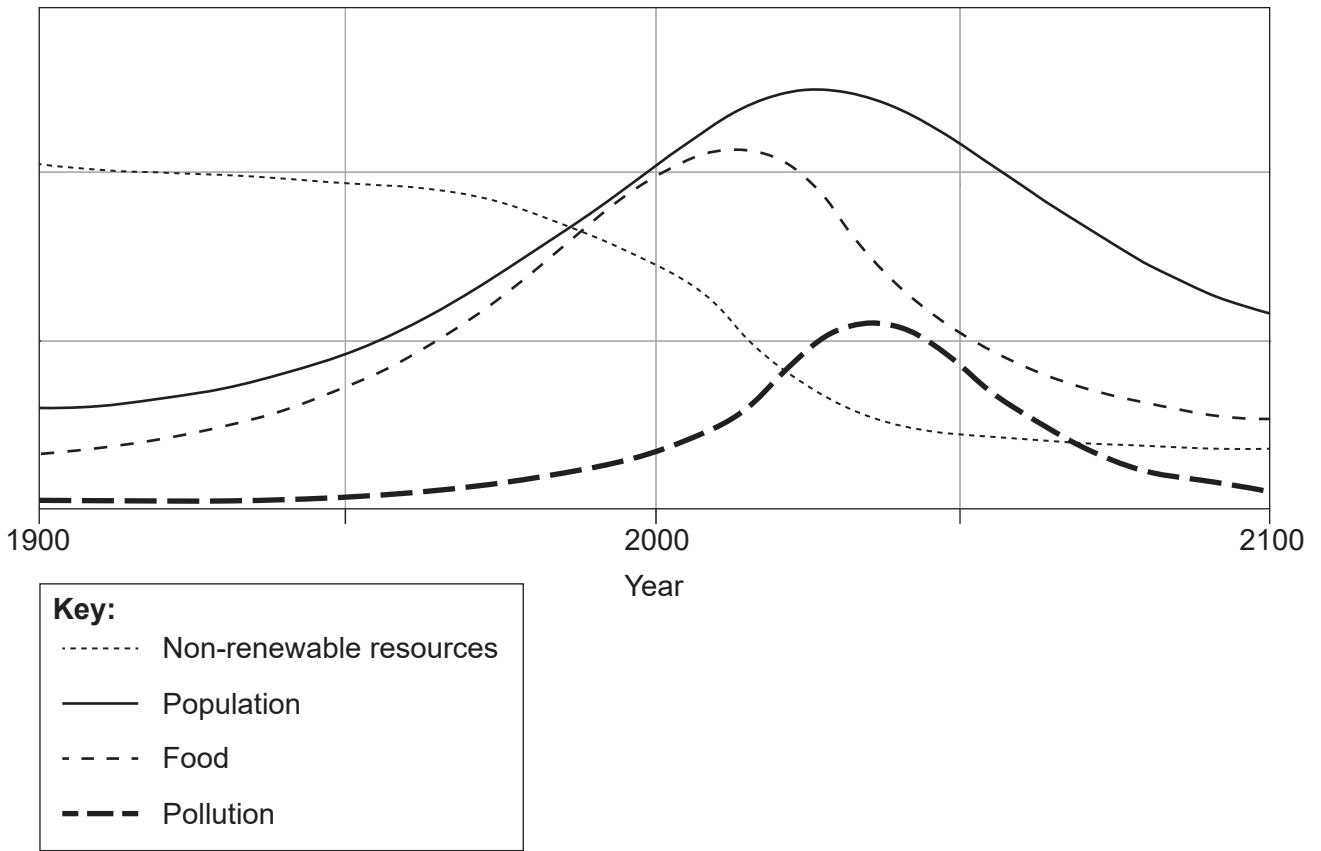


16EP07

Turn over

4. Patterns in resource consumption

The graph shows one possible scenario (set of trends) for the relationship between non-renewable resources and global population over time.



[Source: Scenario 1, State of the World, Page 169 of Meadows, D. H. et. al., *Limits to Growth, The 30-Year Update*, Chelsea Green Publishing, White River Junction, VT, 2004.]

(a) Estimate the year in which global population peaks.

[1]

.....

.....



16EP08

(This question continues on the following page)



16EP09

Turn over

(Question 4 continued)

(b) Describe the changes in the relative levels of non-renewable resources between 1900 and 2100.

[3]

.....

.....

.....

.....

.....

.....

(c) Briefly explain how this graph shows a neo-Malthusian view.

[2]

.....

.....

.....

.....

(This question continues on the following page)



16EP10

(Question 4 continued)

(d) Referring to **one named** resource:

(i) describe a strategy aimed at reducing its consumption;

[2]

Named resource:

Strategy:

.....

.....

.....

(ii) Explain **one** strength **or one** weakness of the strategy as a way of reducing consumption of the named resource.

[2]

.....

.....

.....

.....



16EP11

Turn over

A large rectangular area containing 25 horizontal dotted lines for writing.



16EP13

Turn over

A large rectangular area containing horizontal dotted lines for writing.



16EP14

A large rectangular area containing 25 horizontal dotted lines for writing.



16EP15

Turn over

A large rectangular area containing horizontal dotted lines for writing.



16EP16

A large rectangular area containing 25 horizontal dotted lines for writing.

Turn over